

**MATH**  
**4153-2**

# Geometric representation in general context 1

## **RALLYE MATH**

Your Path to Success



Marie-Ève Côté  
Martin Francoeur

ÉDITIONS  
**MARIE**  
**FRANCE**

# Geometric Representation in a General Context 1

## **RALLYE MATHÉMATICS**

Your path to success

SPÉCIMEN

Marie-Ève Côté  
Martin Francoeur

Linguistic revision: Nathalie Elliot  
Proofreading: Joanne Lacombe  
Design and production: Marquis Interscript  
Cover: BarbArtist, www.shutterstock.com

© 2024, Éditions Marie-France Itée

All rights reserved. It is forbidden to reproduce,  
adapt or translate all or any part of this work  
without the written permission of the copyright owner

Legal Deposit Second quarter 2024  
Library and Archives Canada  
Bibliothèque et Archives nationales du Québec

Éditions Marie-France are members of



ISBN: 978-2-89661-309-0

Printed in Canada


We recognize the Financial Assistance of the Government of Canada through  
the Canada Book Fund for our publishing activities

We recognize the  
government's help  
of Canada.


**Canada**

# TABLE OF CONTENTS

<b>1</b>	<b>Similar triangle</b> .....	2
	Concept exercises .....	2
	Application exercises .....	3
	Context exercises .....	4
	<b>Task 1</b> – Monitoring river levels .....	6
	<b>Task 2</b> – The sidewalk .....	8
	<b>Task 3</b> – Hiking .....	10
<b>2</b>	<b>The Heron formula</b> .....	12
	Concept exercises .....	12
	Application exercises .....	13
	Context exercises .....	14
	<b>Task 4</b> – The “Black Triangle” .....	16
	<b>Task 5</b> – The swimming pool .....	18
	<b>Task 6</b> – Search and rescue .....	20
<b>3</b>	<b>Trigonometry (Right triangle)</b> .....	22
	Concept exercises .....	22
	Application exercises .....	23
	Context exercises .....	24
	<b>Task 7</b> – The bridge .....	26
	<b>Task 8</b> – Urban planning .....	28
	<b>Task 9</b> – Wind farm turbines .....	30



<b>4</b>	<b>Trigonometry (Any triangle)</b> .....	32
	Concept exercises .....	32
	Application exercises .....	33
	Context exercises .....	34
	<b>Task 10</b> – Radar control .....	36
	<b>Task 11</b> – The shipwreck .....	38
	<b>Task 12</b> – Tourlitis Lighthouse .....	40
<b>5</b>	<b>Metric relationships in the right triangle</b> .....	42
	Concept exercises .....	42
	Application exercises .....	43
	Context exercises .....	44
	<b>Task 13</b> – A land inheritance .....	46
	<b>Task 14</b> – Drying herbs .....	48
	<b>Task 15</b> – A new head office .....	50
<b>6</b>	<b>Analytical geometry</b> .....	52
	Concept exercises .....	52
	Application exercises .....	52
	Context exercises .....	54
	<b>Task 16</b> – White Zones .....	56
	<b>Task 17</b> – Building a new road .....	58
	<b>Task 18</b> – Extending a fibre optic network .....	60
<b>C</b>	<b>Corrected from notebook</b> .....	62



SPÉCIMEN

# 3

## TRIGONOMETRY (Right Triangles)

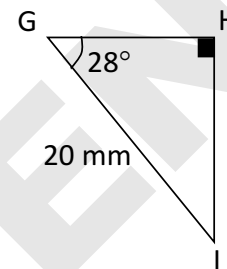
Corrected from the notebook, p. 63

### Concept exercises

1. What is the measurement of  $\overline{GH}$  in triangle GHI?

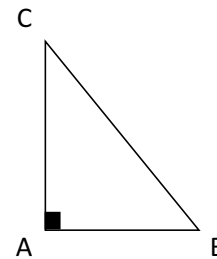
- A)  $\approx 10.63$  mm
- B)  $\approx 28.28$  mm
- C)  $\approx 9.39$  mm
- D)  $\approx 17.66$  mm

Answer: \_\_\_\_\_



2. Which of the following is not an accurate statement about triangle ABC to the right?

- A)  $\cos C = \frac{\overline{AB}}{\overline{BC}}$
- B)  $\sin B = \frac{\overline{AC}}{\overline{BC}}$
- C)  $\tan C = \frac{\overline{AB}}{\overline{AC}}$
- D)  $\cos B = \frac{\overline{AB}}{\overline{BC}}$

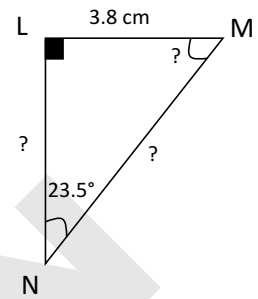


Answer: \_\_\_\_\_

**Application exercises**

3. Observe triangle LMN to the right.

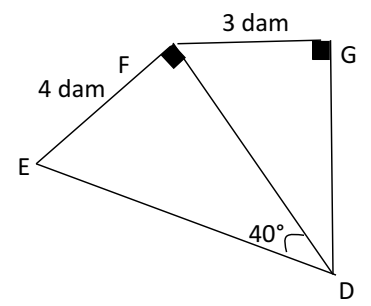
**What measurements are missing?**



Answer: \_\_\_\_\_

4. The following DEF and DFG triangles are similar.

**What is the value of the tangent of angle FDG angle?**



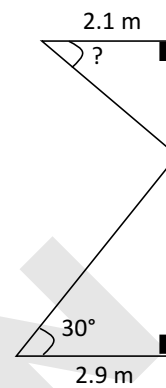
Answer: \_\_\_\_\_



### Context exercises

5. Ulric is responsible for the stage sets at a theater and must install a curtain for a new production. The height of the small shutter must be half of that of the large shutter.

**From the ceiling, what should be the angle of the small shutter so that the curtain respects the plan shown to the right?**



Answer: \_\_\_\_\_

**Context exercises (continued)**

6. At a national park, a lookout standing at a height of 28 m makes it possible to observe ruins through a telescope. Visitors must adjust the telescope so that it has a depression angle of  $34^\circ$  relative to the horizon.

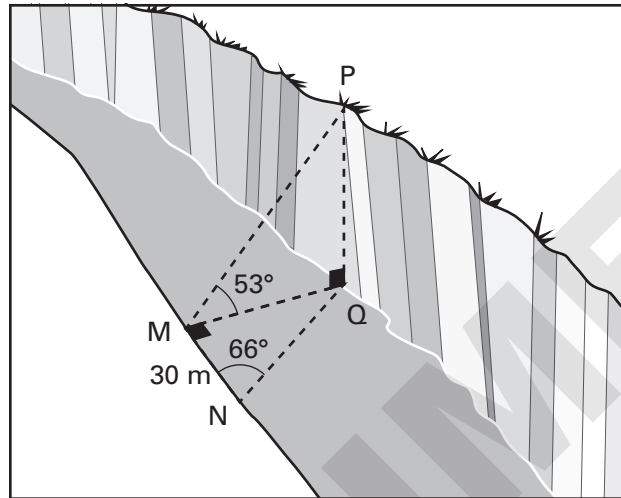
**How far from the bottom of the lookout are the ruins?**



Answer: \_\_\_\_\_

## Task 7 The bridge

A bridge between two banks must be built, but one bank is higher than the other (see diagram). Therefore, a concrete structure on the lowest bank must be installed so that it is the same height as the north shore, to create a bridge deck.



Measurements were taken from two observation points to determine the height between the two banks and the width of the river:


From M;

- $\angle QMP = 53^\circ$

From N;

- $\angle QNM = 66^\circ$
- $\overline{MN} = 35\text{m}$
- $\angle MQP$  is right
- $\angle QMN$  is right

If the shape of the concrete structure is cylindrical and 3 m wide, how much concrete should be provided for the structure?



**Task** **7** **The bridge (continued)**

SPÉCIMEN

Answer: \_\_\_\_\_  
\_\_\_\_\_

**Task 8 Urban planning**

In recent weeks, several citizens have expressed that a new communication antenna atop of the city's tallest building negatively affects the aesthetic of the landscape.


City council therefore seeks consultation from urban planners, regarding the height of the antenna, which must not exceed one third the height of a building.

An official is sent to the site to establish necessary steps. The observation point from which the advisor takes measurements is located 70 m from the base of the building. The official calculate an elevation angle of  $46.3^\circ$  between the ground and the top of the building and an elevation angle of  $57.5^\circ$  between the ground and the top of the antenna.

**With this information, what decision will the official have to make?**

---





**Task** **8** **Urban planning (continued)**

SPÉCIMEN

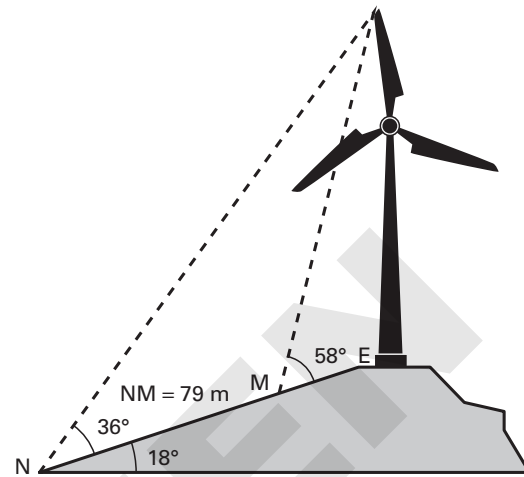
Answer: \_\_\_\_\_  
\_\_\_\_\_  
\_\_\_\_\_

## Task 9 Wind farm turbines


A new wind farm has been built near a village. Some villagers fear that turbines are too close to their homes as the noise they emit is rather loud.

An environmental standard states that the minimum distance between a wind turbine and a home must be more than 10 times the height of the wind turbine.

Measurements near a wind turbine were taken in order to verify adherence to this environmental standard. The image to the right shows the measurements that were obtained:



**Knowing that the house closest to the wind turbines is 1.2 km away, is the environmental standard being respected?**



**Task** **9** **Wind farm turbines (*continued*)**

SPÉCIMEN

Answer: \_\_\_\_\_  
\_\_\_\_\_  
\_\_\_\_\_